



# Y3

# Remote Learning

# ANSWER PACK

*1st March – 5th March 2021*

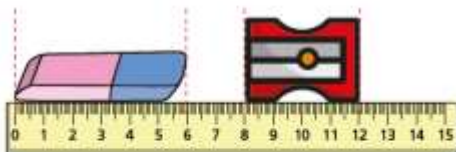


## Maths Answers lesson 1:

### Compare lengths

Write  
these  
Maths

- 1 Write  $<$ ,  $>$  or  $=$  to compare the statements.



Complete the sentences.

shorter

longer

The rubber is longer than the sharpener.

The sharpener is shorter than the rubber.

- 2 Write  $<$ ,  $>$  or  $=$  to compare the statements.

a)  $9 \text{ cm} < 23 \text{ cm}$

b)  $\text{fifty metres} = 50 \text{ m}$

c)  $\text{one metre} > 1 \text{ cm}$

- 5 Write  $<$ ,  $>$  or  $=$  to compare the statements.

a)  $39 \text{ cm} + 9 \text{ cm} > 47 \text{ cm}$

b)  $22 \text{ m} - 6 \text{ m} > 0 \text{ m} + 15 \text{ m}$

c)  $4 \text{ cm} + 13 \text{ cm} < 20 \text{ m} - 3 \text{ m}$

6

$5 \text{ m} = 5 \text{ cm}$

- a) Why is the statement wrong?

Talk about it with a partner

- b) Write  $<$  or  $>$  to correct the mistake.

$5 \text{ m} > 5 \text{ cm}$

- 3 Write digits in the boxes to make the statements correct. e.g.

a)  $40 \text{ cm} < 41 \text{ cm}$

b)  $14 \text{ m} < 15 \text{ m}$

c)  $14 \text{ cm} > 10 \text{ cm}$

d)  $12 \text{ m} < 17 \text{ m} < 20 \text{ m}$

Is there more than one answer for each?

- 4 Would you measure each one using centimetres or metres?

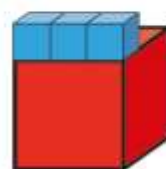
Tick your answer.

centimetres metres

- |                               |                                     |                                     |
|-------------------------------|-------------------------------------|-------------------------------------|
| a) the height of a baby       | <input checked="" type="checkbox"/> | <input type="checkbox"/>            |
| b) the length of a pencil     | <input checked="" type="checkbox"/> | <input type="checkbox"/>            |
| c) the height of a school     | <input type="checkbox"/>            | <input checked="" type="checkbox"/> |
| d) the height of your teacher | <input type="checkbox"/>            | <input checked="" type="checkbox"/> |

What else would you measure in metres?

- 6 One large cube is three times as long as one small cube.



One small cube is 5 cm long.

- a) How long are 2 small cubes?

$10 \text{ cm}$

- b) How long are 10 small cubes?

$50 \text{ cm}$

- c) How long is 1 large cube?

$15 \text{ cm}$

- d) How long are 2 large cubes?

$30 \text{ cm}$





## Red task:

### Developing

- 1a. Various answers, for example: 1m 40m; 1m 50cm; 1m 60cm.  
2a. A: Wendy; B: Craig; C: Wendy  
3a. A, C, B  
4a. B < A

### Developing

- 1a. Various answers, for example: 2m 55cm; 2m 15cm; 2m 65cm.  
2a. Luke is correct because his ribbon is 45cm, whereas Alice's is 50mm = 5cm. 5cm < 45cm.  
3a. The statement is incorrect because 500mm = 50cm. The correct statement is: 500mm < 60cm.

## Gold task:

### Greater Depth


- 9a. Various answers, for example: 2m 153cm; 2m 64cm; 311cm.  
10a. A: Wendy; B: Craig; C: Wendy  
11a. A, C, B  
12a. C > A > B


### Greater Depth


- 7a. Various answers, for example: 575cm; 6m; 5m 132cm.  
8a. Elliot is correct because his dog's lead is 1m 128cm = 2m 28cm, whereas Theresa's is  $1\frac{3}{4}$ m = 175cm.  $1\frac{3}{4}$ m < 1m 128cm.  
9a. The statement is incorrect because  $4\frac{3}{4}$ m = 475cm and 3m 154cm = 4m 54cm. The correct statement is:  $4\frac{3}{4}$ m ≤ 482cm ≥ 3m 154cm.


## Deepen the Moment:

1. Four brothers and sisters are comparing the lengths of the televisions in their house.

 Adrian: The television screen in mine and Adam's room only measures  $1\frac{1}{4}$ m.

 Hanna: The television in the living room has a screen that is  $1\frac{3}{4}$ m long which is longer than the TV in the study.

 Mahida: The TV screen in the study is shorter than the television in the boys' room. Its digits are all odd.

 Adam: The length of my television is no greater than 234cm.

Investigate the lengths of each television and arrange the length in descending order.  
Various answers, for example: living room =  $1\frac{3}{4}$ m, boys' room =  $1\frac{1}{4}$ m, study = 1m 15cm.



## Maths Answers Lesson 2:

### Compare lengths



1 Write  $<$ ,  $>$  or  $=$  to compare the lengths.

a) 60 mm  $=$  6 cm      c) 5 cm  $>$  45 mm

b) 1 m 50 cm  $>$  115 cm      d) 100 mm  $<$  1 m

How did you work this out?

2 Eva, Mo, Alex and Dexter have each built a tower. Use the table to complete the sentences.

| Child  | Height of tower |
|--------|-----------------|
| Eva    | 1 m 5 cm        |
| Mo     | 135 cm          |
| Alex   | 1 m 45 cm       |
| Dexter | 1 m 25 cm       |

- a) Alex's tower is the tallest.  
 b) Eva's tower is the shortest.  
 c) Mo's tower is taller than Dexter's.  
 d) Eva's tower is shorter than Alex's.

3 Write the following lengths in order from shortest to longest.


160 cm    950 mm    1m 50 mm    200 cm    1 m 25 cm

950mm    1m 50mm    1m 25cm    160cm    200cm

shortest

longest

4 Jack, Tommy, Rosie and Whitney have a jumping competition.



Here are the results.

| Jack   | Tommy  | Rosie         | Whitney       |
|--------|--------|---------------|---------------|
| 870 mm | 105 cm | 1 m and 30 mm | 1 m and 10 cm |

The person who jumped the furthest wins the competition. Put the children in order from 1st to 4th place.

Whitney    Tommy    Rosie    Jack  
 1st    2nd    3rd    4th

© White Rose Maths 2019

5 Measure the height of four of your classmates. Measure their foot length and then complete the table.

| Name | Height in cm | Foot length in cm |
|------|--------------|-------------------|
|      |              |                   |
|      |              |                   |
|      |              |                   |
|      |              |                   |

What have you found? Do taller people have longer feet?

6 Measure the height of four of your classmates. Measure how far they can jump and then complete the table.

| Name | Height in cm | Jump length in cm |
|------|--------------|-------------------|
|      |              |                   |
|      |              |                   |
|      |              |                   |
|      |              |                   |

Talk about what your results show. Can taller people jump further?

7 Teddy, Mo, Amir, Dora and Annie have each grown a sunflower. Use the clues below to work out which sunflower belongs to which child.

|                |             |             |            |                |
|----------------|-------------|-------------|------------|----------------|
|                |             |             |            |                |
| A<br>1 m 10 cm | B<br>101 cm | C<br>550 mm | D<br>98 cm | E<br>1 m 12 cm |

Amir: My sunflower is twice as tall as Teddy's.

Mo: My sunflower is less than 1 m tall.

Dora: My sunflower is 3 cm taller than Mo's.

Annie: My sunflower is the tallest.

Write the owner of each sunflower.

sunflower A: Amir    sunflower D: Mo  
 sunflower B: Dora    sunflower E: Annie  
 sunflower C: Teddy

© White Rose Maths 2019







## Red task:

### Developing

1b. Various answers, for example: 60cm; 70cm; 80cm.

2b. A: Mia; B: Danny; C: Mia

3b. C, B, A

4b.  $A > B$

### Developing

1b. Various answers, for example: 2m 20cm; 2m 40cm; 2m 70cm.

2b. Emme is correct because her ribbon is 60cm, whereas Alfie's is 80mm = 8cm.  $8\text{cm} < 60\text{cm}$ .

3b. The statement is incorrect because  $90\text{mm} = 9\text{cm}$ . The correct statement is:  $70\text{cm} > 90\text{mm}$ .

## Gold task:

### Greater Depth

9b. Various answers, for example: 300mm; 29cm; 31cm 7mm.

10b. A: Talha; B: Jane; C: Jane

11b. A, C, B

12b.  $B < A > C$  or  $C < A > B$

### Greater Depth

7b. Various answers for example: 375cm; 5m; 4m 112cm.

8b. Phoebe is correct because her dog's lead is 68cm 80mm = 76cm, whereas Alan's is  $\frac{3}{4}\text{m} = 75\text{cm}$ .  $\frac{3}{4}\text{m} < 68\text{cm} 80\text{mm}$ .

9b. The statement is incorrect because  $5\frac{1}{2}\text{m} = 550\text{cm}$  and  $4\text{m } 133\text{cm} = 533\text{cm}$ . The correct statement is:  $5\frac{1}{2}\text{m} \geq 4\text{m } 133\text{cm} \leq 547\text{cm}$ .

## Deepen the Moment:

2. Travel through the maze following the pattern below.

Greater than, less than, greater than, less than, greater than

|         |         |                         |                        |                                 |
|---------|---------|-------------------------|------------------------|---------------------------------|
| Start → | 768mm → | 76cm 12mm ↓             | 19cm 8mm               | $1\frac{1}{4}\text{m}$          |
|         | 400cm   | $\frac{1}{2}\text{m}$ ↓ | $5\frac{3}{4}\text{m}$ | 291mm                           |
|         | 5m 28cm | 392cm →                 | 94cm 7mm →             | $4\frac{3}{4}\text{m}$ → Finish |
|         | 279cm   | 45mm                    | 4m 123cm               | 100cm                           |

Investigate if there is more than one route.  
Various answers, for example: one shown above.

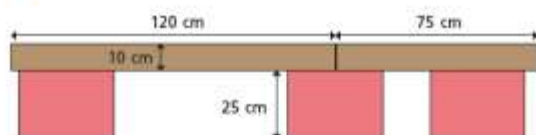


## Maths Answers Lesson 3:

### Add lengths



- 1 Scott builds a bridge using planks.

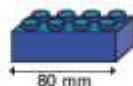
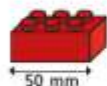


- a) What is the total length of his bridge? 195 cm
- b) What is the height of his bridge? 35 cm

- 2 Complete the additions.

- a)  $25 \text{ cm} + 75 \text{ cm} =$  1 m
- b)  $10 \text{ cm} + 50 \text{ mm} =$  15 cm
- c)  $1 \text{ m } 20 \text{ cm} +$  80 cm  $= 2 \text{ m}$
- d)  $52 \text{ mm} +$  8 mm  $= 6 \text{ cm}$

- 3 Red bricks are 50 mm long.  
Blue bricks are 80 mm long.



- a) Whitney and Eva make patterns using the bricks.  
How long is each pattern?  
Give your answers in centimetres.



Whitney

Whitney's pattern is 26 cm long.



Eva

Eva's pattern is 37 cm long.

- b) Draw some red and blue bricks to make a pattern that would be exactly 36 cm long.



- 3 Brett is 115 cm tall.

His brother is 20 cm taller.

How tall is Brett's brother?

Write your answer in metres and centimetres.

1 m and 35 cm

- 4 Dora builds a tower that measures 1 m and 5 cm.

Annie builds a tower that measures 80 cm.

Dexter builds a tower that measures 95 cm.

They put their towers together to make one high tower.

How tall is their new tower?

The new tower is 280 cm tall.

This is the same as 2 m and 80 cm.

© White Rose Maths 2019

- 6 Jack, Tommy and Alex took part in a hop, skip and jump competition.

Their distances are shown in the table below.

Complete the table to show the total distance each child travelled.

| Name  | Hop   | Skip  | Jump      | Total   |
|-------|-------|-------|-----------|---|
| Jack  | 80 cm | 60 cm | 1 m 20 cm | <span style="border: 1px solid black; padding: 2px;">2 m 60 cm</span> |
| Tommy | 70 cm | 1 m   | 1 m 10 cm | <span style="border: 1px solid black; padding: 2px;">2 m 80 cm</span> |
| Alex  | 75 cm | 75 cm | 1 m       | <span style="border: 1px solid black; padding: 2px;">2 m 50 cm</span> |

- 7 Esther builds a tower using some bricks.

Her tower is 24 cm tall.

Which bricks could she have used?



Various answers

How many different answers can you find?

© White Rose Maths 2019

## Red task:

### Developing

- 1a. Maurice, because Carla = 2m 65cm or 265cm; Terri = 2m 55cm or 255cm and Maurice = 2m 95cm or 295cm  
 2a. 6m 35cm or 635cm  
 3a. 5m 70cm  
 4a. 95cm (60cm + 35cm)

### Developing

- 1b. Black and silver: 430cm + 3m 15cm = 7m 45cm  
 2b. Bus, scooter and car: = 175mm or 17cm 5mm; lorry, scooter and car: = 195mm or 19cm 5mm.  
 3b. C is the odd one because it is 6m 35cm whereas A and B are 6m 95cm.

## Gold task:

### Greater Depth

- 9a. Paula, because Yasmin = 292cm 5mm; Paula = 293cm 7mm and James = 289cm 6mm.  
 10a. 1m 83cm 6mm  
 11a. 9m 22cm 4mm or 9m 224mm  
 12a. 456mm or 45cm 6mm (75mm + 32cm + 61mm)

### Greater Depth

- 7b. Blue, green, gold and purple: 76cm 3mm + 532mm + 1  $\frac{1}{2}$  m 13cm + 37mm = 2m 96cm 2mm  
 8b. Car B, D and E = 192cm; C, D and E = 176cm 5mm  
 9b. A is the odd one out because it is 1m 10cm 6mm whereas B and C are 1m 08cm 2mm.


## Deepen the Moment:

1. The aliens are trying to reach different items on the three shelves. They need to climb on top of each other in order to reach the items.



Investigate what combination of aliens could group together to reach each item. There are five of each type of alien that can be used. Various answers, for example:  
 Shelf A: 1 Pog, 2 Jibs, 2 Baxs, 1 Nub and 3 Zoms = 263cm 3mm  
 Shelf B: 5 x Nubs, 1 x Pog, 2 Jibs and 2 Zoms = 381cm  
 Shelf C: 3 Baxs, 2 Jibs and 1 Zom = 146cm 6mm

2. Annabella and Anton are making daisy chains for their favourite teachers. They pick daisies from the field at random. The different lengths of the daisies are shown below.








## Maths Answers Lesson 4:

### Subtract lengths

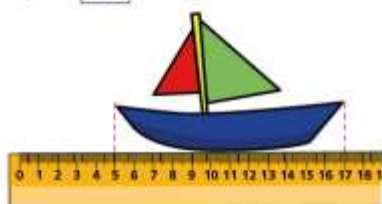
- 1 Complete the sentences to describe the lengths of the objects.

a)



The toy car is **90** mm long.

b)



The toy boat is **12** cm long.

c) The toy boat is **3** cm longer than the toy car.

The toy car is **30** mm shorter than the toy boat.

- 4 Nijah buys 5 m of ribbon. She uses 78 cm of the ribbon to decorate a bag. How much ribbon does she have left?



**4** m and **22** cm

- 5 Complete the number sentences.

a)  $2 \text{ m} - 50 \text{ cm} = \text{150 cm}$

b)  $85 \text{ mm} - 2 \text{ cm} = \text{65 mm}$

c)  $9 \text{ cm } 5 \text{ mm} - 20 \text{ mm} = \text{7 cm and 5 mm}$

d)  $100 \text{ mm} - \text{4 cm} = 6 \text{ cm}$

- 6 Huan has a 10 m ball of string.

He uses 50 cm to replace his shoelace.

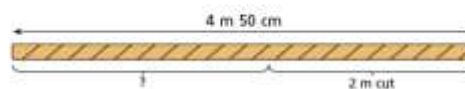
He uses some more of his string to make a bow for his arrows.

He has 7 m and 45 cm of string left.

How much string did Huan use to make his bow?

**2** m and **5** cm

- 2 Jack's rope is 4 m 50 cm long. He uses 2 m to make a swing. How long is his rope now?



Jack's rope is now **2** m and **50** cm long.

- 3 Tommy, Rosie and Annie each measure their height.



Annie



Rosie  
135 cm



Tommy  
1 m 15 cm

- a) What is the difference in height between Tommy and Rosie?

**20 cm**

- b) Annie is 30 mm shorter than Rosie. What is Annie's height?

**132 cm**

© White Rose Maths 2018

- 7 Fill in the empty boxes so that each row and column adds up to 2 m.

|                  |              |              |
|------------------|--------------|--------------|
| 50 cm            | <b>1 m</b>   | 50 cm        |
| <b>1 m 15 cm</b> | <b>15 cm</b> | <b>70 cm</b> |
| <b>35 cm</b>     | <b>85 cm</b> | <b>80 cm</b> |

Talk about what you did with a partner.

Are your answers the same?

Create your own problem like this using a different total.

Ask a partner to find the answer.

|  |  |  |
|--|--|--|
|  |  |  |
|  |  |  |
|  |  |  |

© White Rose Maths 2018





1. Ruth has arranged all of the items from inside her pencil case into a horizontal line which measures 123cm.

The scissors have the longest length. The pot of glue and the pen both measure 170mm, which is 20mm less than the calculator. The paintbrush is 5mm longer than the highlighter but 5mm shorter than the calculator. The rubber has the shortest length. All of the lengths are in the 5 times table.

Ruth

170mm 190mm 185mm 180mm 195mm 140mm 170mm

Not drawn to scale

When Ruth goes into the kitchen to make a drink, her little brother takes two items away and rearranges the straight line. Now, the line is between 85cm and 91cm long.

Explore which two items Ruth's brother could have taken away. Various answers, for example: He could have removed the glue pot and the highlighter.  $123\text{cm} - 17\text{cm} = 106\text{cm}$ ,  $106\text{cm} - 18\text{cm} = 88\text{cm}$ .

2. Arrange the set of loop cards below so that each end is matched to an equal value.

7m and 72cm - 685cm

$\frac{3}{4} \text{ m} - 115\text{cm}$

255cm - 370mm

$\frac{1}{4} \text{ m} - 458\text{cm}$

$\frac{1}{4} \text{ m} - 630\text{mm}$

$9\text{m} - \frac{3}{4} \text{ m}$

8m and 11cm - 484cm

345cm - 440mm

4m and 58cm - 362cm

571cm - 346cm

$8\frac{1}{4} \text{ m} - 6\text{m and } 55\text{cm}$

4m - 80mm

730cm - 250mm

258cm

$\frac{1}{4} \text{ m} - 258\text{cm}$

810cm - 8m and 11cm

8m - 330mm

The loop cards should be matched as shown above.



## Maths Answers Lesson 5:

### Mark scheme

| Qu. | Requirement | Mark | Additional guidance |
|-----|-------------|------|---------------------|
| 1   | 8           | 1m   |                     |
| 2   | 150         | 1m   |                     |
| 3   | 48          | 1m   |                     |
| 4   | 195         | 1m   |                     |
| 5   | 892         | 1m   |                     |
| 6   | 24          | 1m   |                     |
| 7   | 44          | 1m   |                     |
| 8   | 8           | 1m   |                     |
| 9   | 542         | 1m   |                     |
| 10  | 515         | 1m   |                     |
| 11  | 88          | 1m   |                     |
| 12  | 386         | 1m   |                     |
| 13  | 718         | 1m   |                     |
| 14  | 198         | 1m   |                     |
| 15  | 36          | 1m   |                     |
| 16  | 5           | 1m   |                     |
| 17  | 292         | 1m   |                     |
| 18  | 12          | 1m   |                     |
| 19  | 150         | 1m   |                     |
| 20  | 42          | 1m   |                     |
| 21  | 240         | 1m   |                     |



## English Answers Lesson 1:

### The Old Teacher by Alan Ahlberg.

**Key vocabulary:** Stock-cupboard, Hymn-books, Wendy house.

#### Retrieval

1.) Where did the old teacher sleep?

The old teacher usually slept in the stock-cupboard

2.) What did the children bring her to eat?

The children brought her apples to eat

#### Inference

3.) Do you think that the old teacher was happy living as she did? Explain your reasoning.

If yes, answers may include that she continued to live there and had lived there for many years / her basic needs were being met; the poem says that she had food, shelter, somewhere to sleep, somewhere to wash / She had been a teacher for many years, and may have loved the school so much that she chose to live there / there is nothing in the poem to suggest that she wanted things to be any different.

If no, answers may include that she could have been lonely, the stock-cupboard was probably not very comfortable / she would have been cold with paper for blankets, hungry with only apples to eat, dirty with only the goldfish water to wash her face in / the Wendy house would have been small, even for an old lady to live in.

4.) Do you think a Wendy house is an appropriate place for an old lady to live? Why / Why not?

Yes it is – answers may include that the Wendy house is cosy / it is free to live in / it is a small place to keep clean and tidy and any other reasonable explanations.

No it is not – answers may include that the Wendy house is too small for anyone to live in properly / it does not have running water and electricity and any other reasonable explanations.

#### Vocabulary

5.) What does “as a rule” mean in line 3?

As a rule means usually

6.) What is a Hymn-book? Where else, other than school, might a Hymn book be used?

A hymn-book is a book that contains religious songs and music

#### Deepen the Moment

Why do you think that the teacher lived in school? Write at least two reasons to support why she might live there.

Reasons could include that she had no house of her own / not enough money / that she loved the school / that she wanted to look after the school / she worked so hard at being a teacher each day, that it was easier to live in school than to travel each day / her house was too far away to travel every day, so it was easier to stay at the school



## English Answers Lesson 1: Red Task

### The Old Teacher by Alan Ahlberg

#### ANSWERS

**Key vocabulary:** Stock-cupboard, Hymn-books, Wendy house.

#### **Retrieval**

1.) Where did the old teacher sleep?

The old teacher usually slept in the stock-cupboard.

2.) What did the children bring her to eat?

The children brought her apples to eat

#### **Inference**

3.) Do you think that the old teacher was happy living as she did? Give one reason to support your answer.

If yes, answers may include that she continued to live there and had lived there for many years / her basic needs were being met; the poem says that she had food, shelter, somewhere to sleep, somewhere to wash / She had been a teacher for many years, and may have loved the school so much that she chose to live there / there is nothing in the poem to suggest that she wanted things to be any different.

If no, answers may include that she could have been lonely, the stock-cupboard was probably not very comfortable / she would have been cold with paper for blankets, hungry with only apples to eat, dirty with only the goldfish water to wash her face in / the Wendy house would have been small, even for an old lady to live in.

#### **Vocabulary**

4.) What does "as a rule" mean in line 3? Does it mean usually, sometimes or never?

As a rule means usually.

5.) What is a Hymn-book?

A hymn-book is a book that contains religious songs and music

#### **Deepen the Moment**

Why do you think that the teacher lived in school? Write at least one reason to support why she might live there.

Reasons could include that she had no house of her own / not enough money / that she loved the school / that she wanted to look after the school / she worked so hard at being a teacher each day, that it was easier to live in school than to travel each day / her house was too far away to travel to school each day.





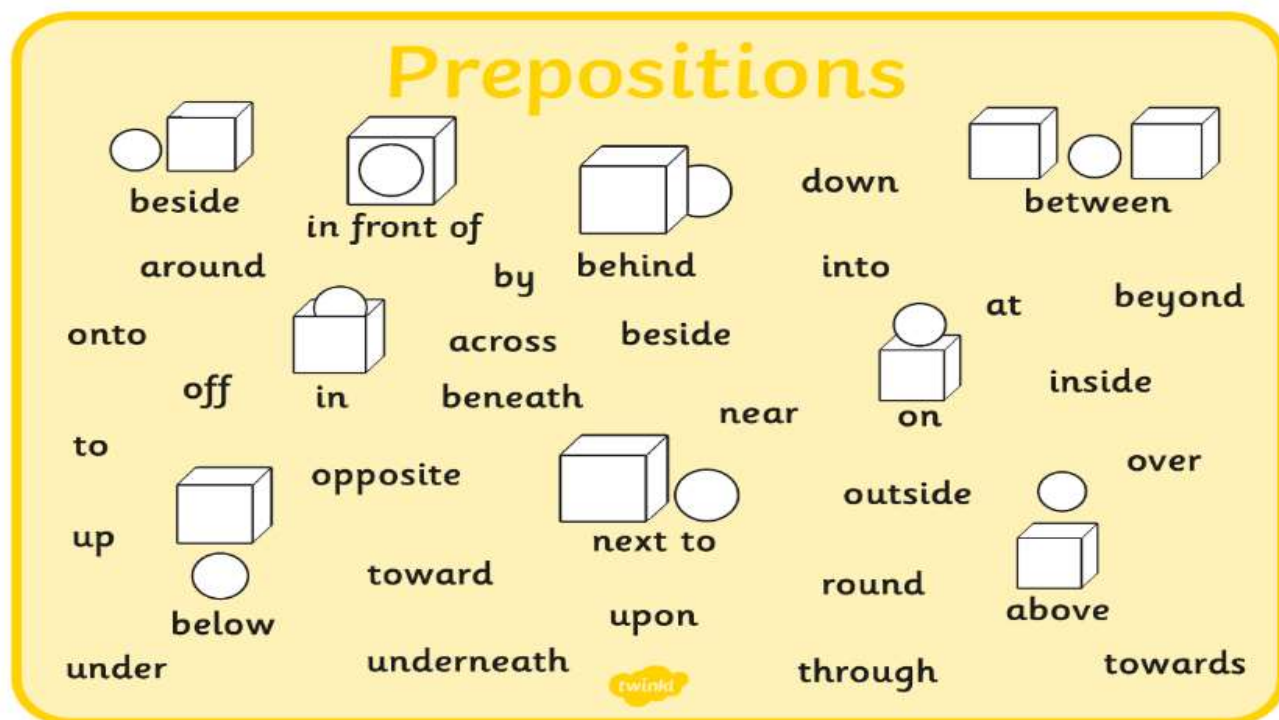
## English Answers Lesson 2:

### Task 2:

Daniel's bedroom was a terrible mess! It looked like a tornado had passed across his room and turned everything upside-down! Across the floor, toys were scattered and Daniel's favourite superhero toy had been thrown under the bed. A pile of old magazines were precariously stacked behind the bedroom door, waiting to be knocked over. By his bed, a small table stood, covered in empty sweet wrappers and an old drink carton. Feeling horrified, Daniel's mum hadn't entered the room for several days due to the mess. Behind the wardrobe doors, piles of unfolded and dirty clothes lay screwed up waiting to be sorted. 'I want this bedroom cleaned by tomorrow,' demanded his mum. Daniel walked into his room and lay on his bed.

'I'll do it first thing in the morning,' he thought to himself as he shoved another dirty sock beneath his pillow.

### Task 3: Any sentences about the picture that include one of these words





## English Answers Lesson 5:

### Task 1

Look at the sentences below and rewrite the sentences so that they are written formally.

Tilly always butts in on our chats.

Tilly often interrupts our conversations.

---

The Kids in Class 4 were mega happy about their trip.

The children in class 4 were extremely happy about their trip.

---

I can't work out what his job is.

I am finding it difficult to imagine what his job might be.

---



Mrs S. Webb  
2 Frustum Road  
Pendyville  
SP1 4LF

62 Twaddle Street  
Rambleswisck  
PT5 7AP

Dear Amy,

Thank you for your email regarding my purchase of a plot of land. I have to say, however, that I am deeply disappointed with the lack of access to this land. I applied for this land because I would have liked to own a little piece of the Scottish Highlands. Sadly this land was at the very top of a highly inaccessible mountain and I feel I have wasted a precious £300. I am angry and want my money back!

Your comments would be appreciated.

Regards

Sarah Webb

- *The date*
- *The name of the recipient*
- *A formal greeting*
- *Appropriate tone*
- *A formal close*



## Reading for Productivity Answers

### Music:

#### Answers

#### Retrieval

1. What is the pulse?  
Pulse is a **steady beat** like a ticking clock or your heartbeat.
2. What kinds of beats are there?  
Fast and slow.
3. What is the difference between rhythm and pulse?  
Rhythm is a pattern of long and short sounds. With a pulse, the beats are evenly spaced.
4. What does BPM stand for?  
Beats per Minute

#### Vocabulary

5. What simile is used to describe the beat?  
Like a ticking clock.
6. What does 'foundations' mean?  
An underlying basis or principle.





## Geography:

1. When did the Fairtrade Foundation begin in the United Kingdom?  
**The Fairtrade Foundation began in 1992.**
2. What does Fairtrade mean?  
**Fairtrade means a fair price for the goods that farmers produce.**
3. What does 'wage' mean?  
**A wage is a regular, fixed amount for good and services.**
4. Why do you think it is important that farmers and workers build better homes?  
**Answers could include reasons such as safety, shelter, people can be cleaner, healthier and happier.**
5. Can you say which of these items would **not** have the Fairtrade logo? Why?  
**Television and cars would not have the Fairtrade logo. That is because Fairtrade is for farmers and workers who grow crops to sell.**
6. Name three countries around the world that have Fairtrade organisations.  
**Various answers - choose any three from the map.**
7. One banana in three eaten is Fairtrade. Name a country Fairtrade bananas come from.  
**Fairtrade bananas come from Colombia.**
8. Do you think Fairtrade is important? Explain.  
**Answers will vary but might include themes such as supporting people less well off and giving a fair price.**



## Science:

### Reading for Productivity- Sunflower Life Cycle

Key vocabulary- life cycle, types, stage, seed, germination, compost.

Retrieval-

1. How many different types of sunflower are there? **Around 60.**
2. How tall was the tallest sunflower ever grown? **9.17 metres.**

Inference-

3. Explain why you think the sunflower is planted during spring? **Due to the conditions.**

Vocabulary-

4. What does the word **sprout** mean in this sentence 'the seed begins to sprout roots 1-2 weeks after planting.' **Put out shoots.**
5. What order has the text been written in? **Chronological.**



## World Book Day – Quiz answers:



1. Name the famous book character. **Willy Wonka**

2. The author Michael Morpurgo writes books mainly about what?

- A. Witches & Wizards
- B. Science Fiction
- C. Adventures set in real places**
- D. Comedy

3. Which one of Roald Dahl's characters is being described here?

"She was above all a most formidable female. She had once been a famous athlete and even now the muscles were still clearly in evidence. You could see them in her bull neck, big shoulders, the thick arms, the sinewy wrists and in the powerful legs. Looking at her you got the feeling this was someone who could bend iron bars and tear telephone directories in half."

**Miss Trunchbull - Matilda**

4. What is the name of Mr Filch's cat in Harry Potter?

- A. Mrs Lorriss
- B. Mrs Morris
- C. Mrs Doris
- D. Mrs Norris**

5. Who wrote the following list of books?

'The Island of Adventure.'

'First Term at Malory Towers.'



'Five Go Adventuring again.'  
'The Enchanted Wood.'

Enid Blyton



6. Who is this famous author?

Jacqueline Wilson

7. Which author wrote the following books? Demon Dentist, Ratburger and Billionaire Boy. David Walliams

8. Which famous bear lived in Hundred Acre Wood? Winnie-the-Pooh

9. Fill in the blanks and look at the pictures to find the title of this famous Dr. Seuss book. The Cat in the Hat.



10. What was the first children's book Roald Dahl ever wrote?

James and the Giant Peach.

11. Name the author that wrote 'How to Train Your Dragon'. Cressida Cowell.

12. What are the names of the four children in The Lion, The Witch and The Wardrobe? Peter, Lucy, Edmund and Susan.






13. What is the name of the elephant in The Firework Maker's Daughter? **Hamlet**

14. Name the book.

**The Jolly Postman**



15. Which magical character is being described? **Professor Snape**

His eyes were black like Hagrid's but had none of Hagrid's warmth. They were cold and empty and made you think of dark tunnels. He spoke in barely more than a whisper but you caught every word. He swept around in his long, black cloak criticising everyone.



Art:

### Reading for Productivity – Art - Guiseppe Arcimboldo

#### Retrieval

1. What nationality is Arcimboldo? Italian
2. What was Arcimboldo first job? He used to create stained glass window
3. What did Arcimboldo use to resemble human portraits? Fruits, vegetables, animals, books and other objects.

#### Vocabulary

4. What do you think the word 'produce' means? Make or create something
5. Write a synonym for the word rediscover. Recoup, repair, regain, retrieve, resume, get back